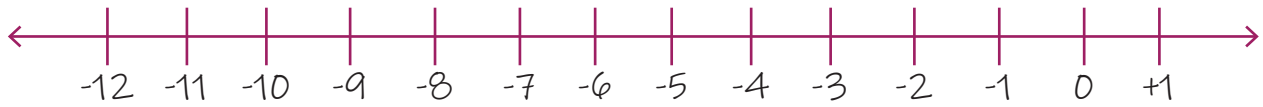


Name: _____

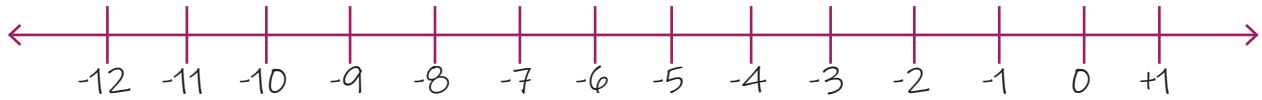
Date: _____

Adding Two Negative Numbers Using Number Lines

1. $(-10) + (-1) = ?$



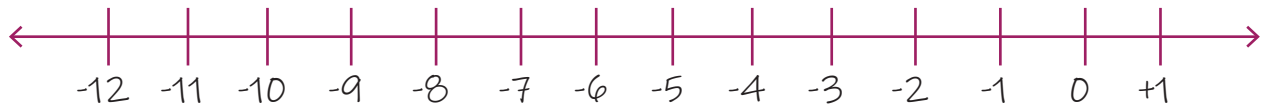
2. $(-5) + (-7) = ?$



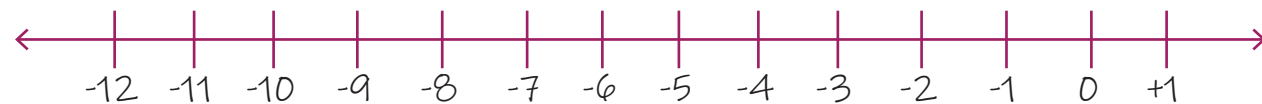
3. $(-9) + (-3) = ?$



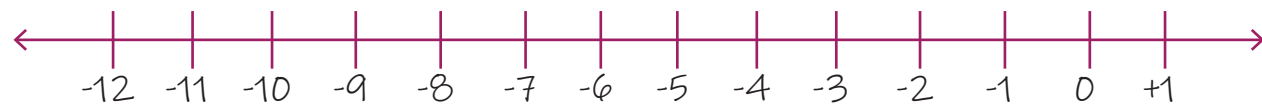
4. $(-8) + (-2) = ?$



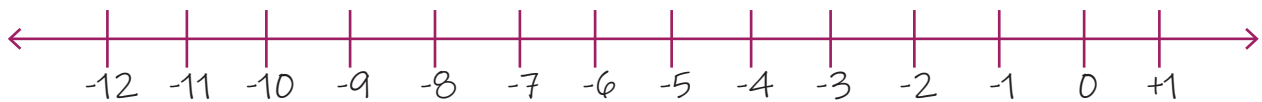
5. $(-4) + (-7) = ?$



6. $(-5) + (-6) = ?$



7. $(-2) + (-7) = ?$



8. $(-5) + (-2) = ?$

