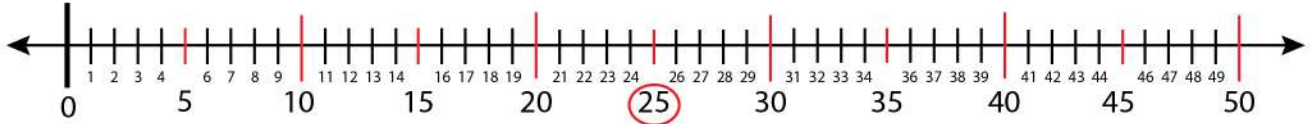


Date:

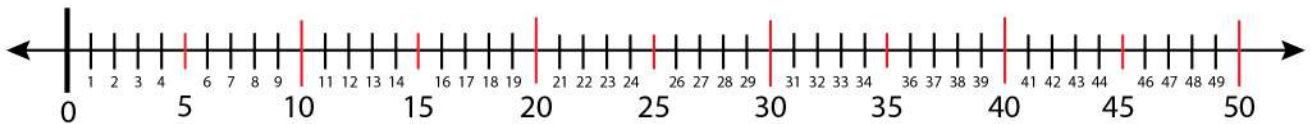
Name:

## Finding Odd and Even Number on a Number Line

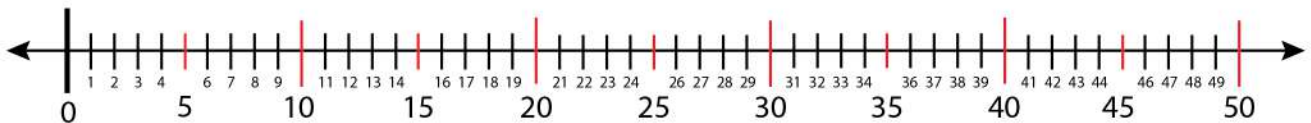
Find the odd number 25 on the number line.



Find 3 odd numbers from 21-29.



Find 3 even numbers from 21-29.



Find 2 odd numbers from 11-19.

