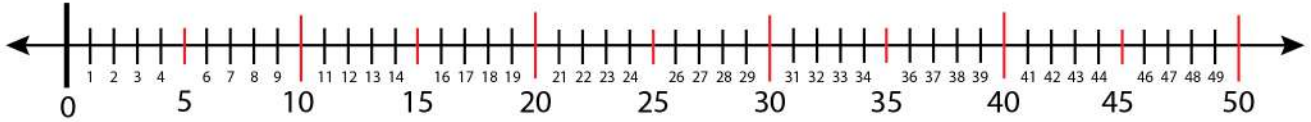


Date:

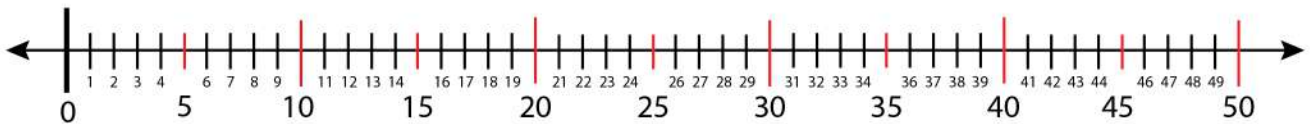
Name:

## Finding Odd and Even Number on a Number Line

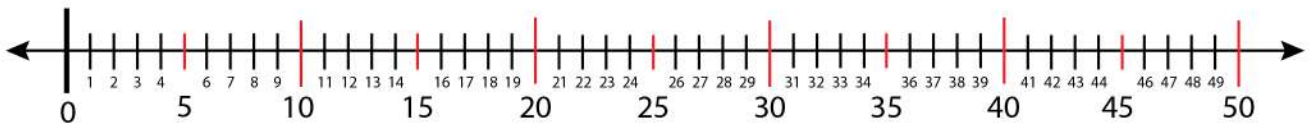
Find 5 consecutive even numbers on the number line.



Find the even numbers: 12, 16, 48.



Find the even numbers: 18, 26, 44.



Find the odd numbers: 19, 21, 23, 25, 33, 37.

