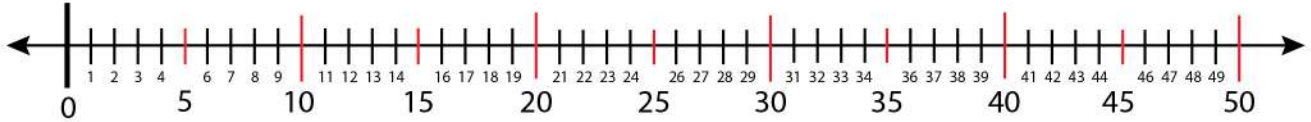


Date:

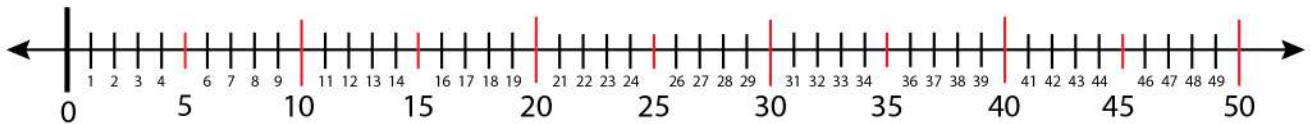
Name:

Finding Odd and Even Number on a Number Line

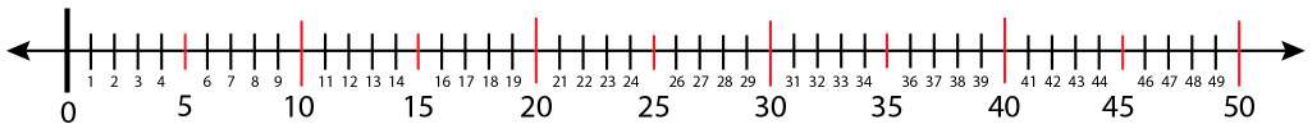
Find odd number 15 on the number line.



Find 10 consecutive odd numbers on the number line.



Find 10 consecutive even numbers on the number line.



Find 5 consecutive odd numbers in the range of 41-50.

