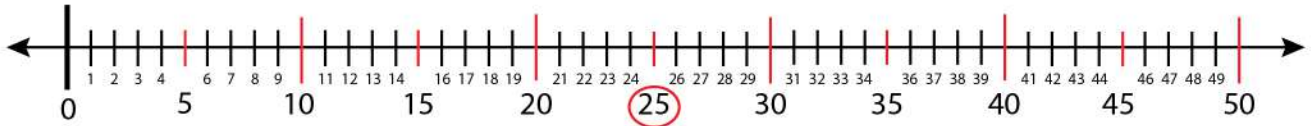


Date: \_\_\_\_\_

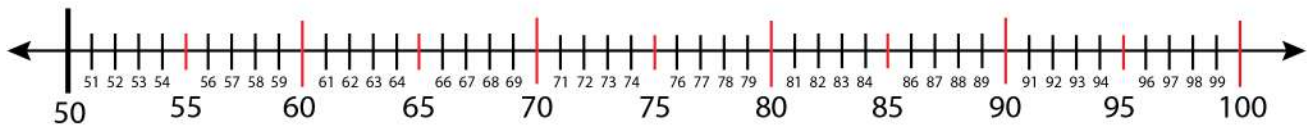
Name: \_\_\_\_\_

## Finding Odd and Even Number on a Number Line

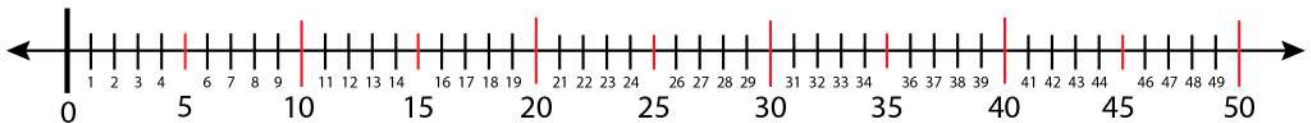
Find the odd number 25 on the number line.



Find 3 odd numbers from 51-59.



Find 3 even numbers from 31-39.



Find 2 odd numbers from 81-89.

