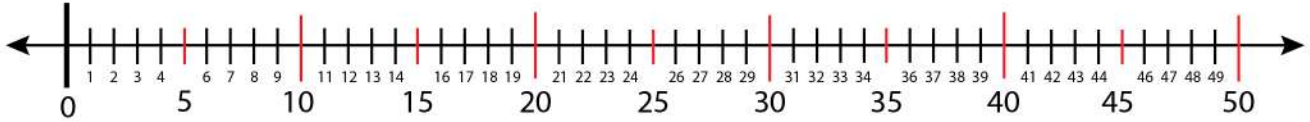


Date:

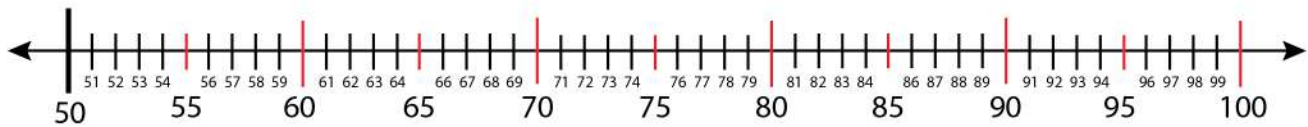
Name:

Finding Odd and Even Number on a Number Line

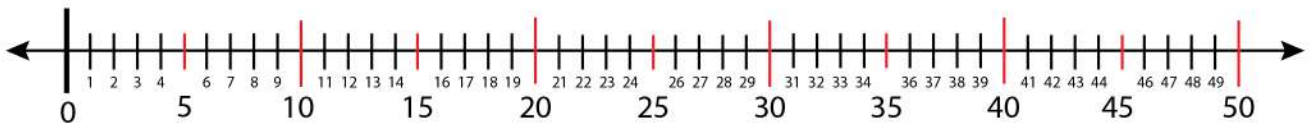
Find 6 consecutive even numbers on the number line.



Find the even numbers: 62, 66, 88.



Find the even numbers: 38, 36, 34.



Find the odd numbers: 59, 61, 93, 95, 83, 77.

