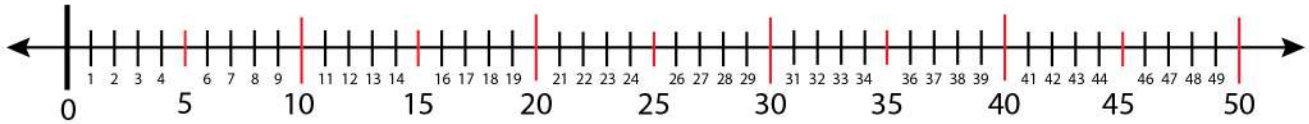


Date: _____

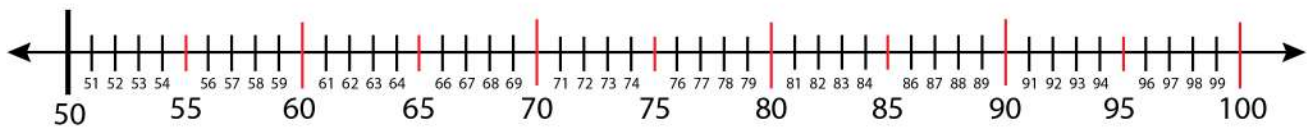
Name: _____

Finding Odd and Even Number on a Number Line

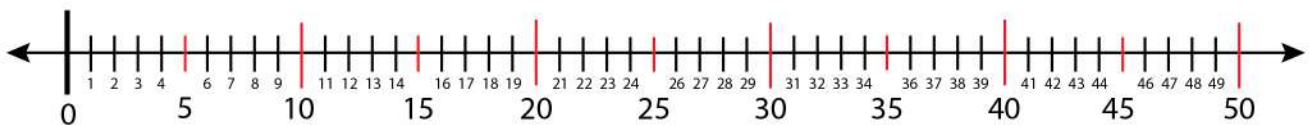
Find odd number 65 on the number line..



Find 5 consecutive odd numbers on the number line.



Find 15 consecutive even numbers on the number line.



Find 5 consecutive odd numbers in the range of 91-100.

