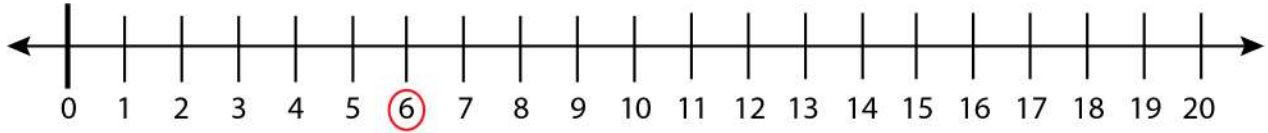


Date: \_\_\_\_\_

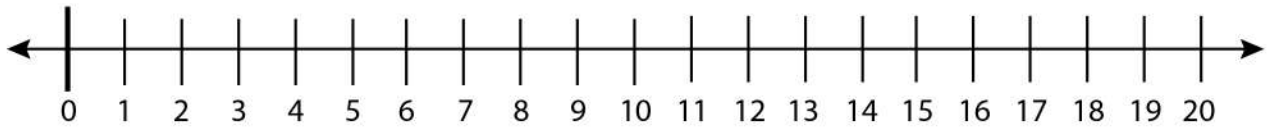
Name: \_\_\_\_\_

## Finding Odd and Even Numbers on a Number Line

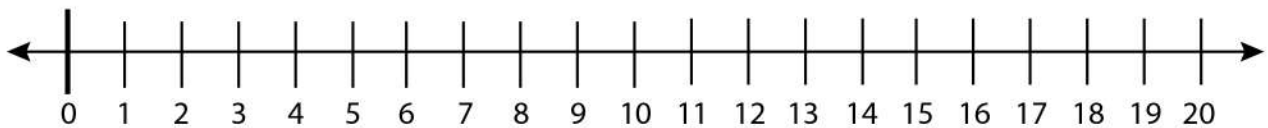
Find an even number on the number line and circle them.



Find 3 consecutive even numbers on the number line and circle them.



Find last 3 consecutive even numbers on the number line and circle them.



Find all the even numbers on the number line and circle them.

