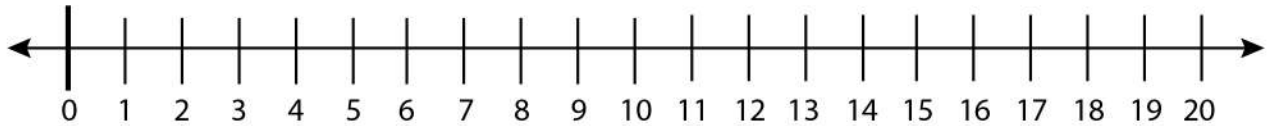


Date: \_\_\_\_\_

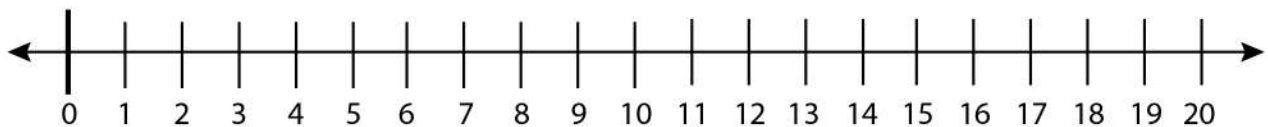
Name: \_\_\_\_\_

## Finding Odd and Even Numbers on a Number Line

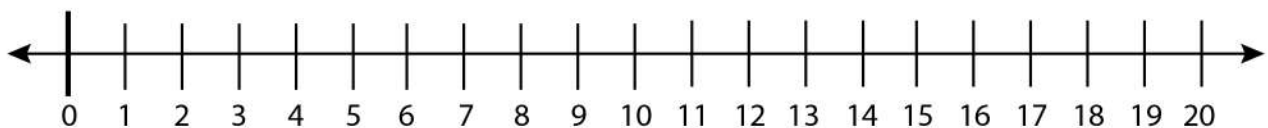
Find 4 consecutive odd numbers on the number line and circle them.



Find all the odd numbers on the number line and circle them.



Find any 6 odd numbers on the number line and circle them.



Find first 3 odd numbers on the number line and circle them.

