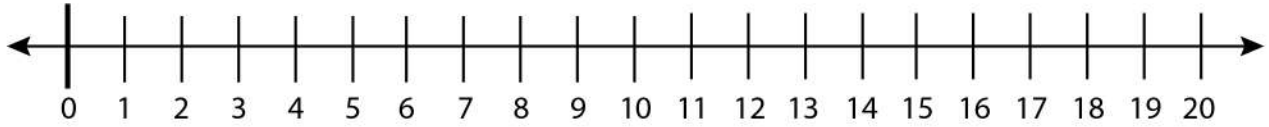


Date: \_\_\_\_\_

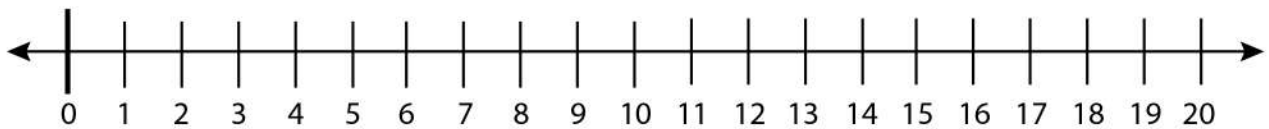
Name: \_\_\_\_\_

## Finding Odd and Even Numbers on a Number Line

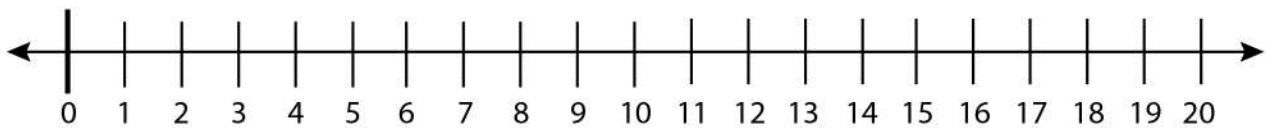
Find 3 consecutive even and odd numbers on the number line and circle them.



Find 2 even and odd numbers and circle them.



Find 4 even and odd numbers and circle them.



Find 6 even and odd numbers and circle them.

