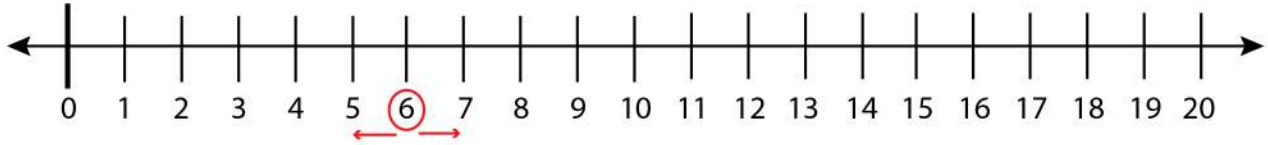


Date: _____

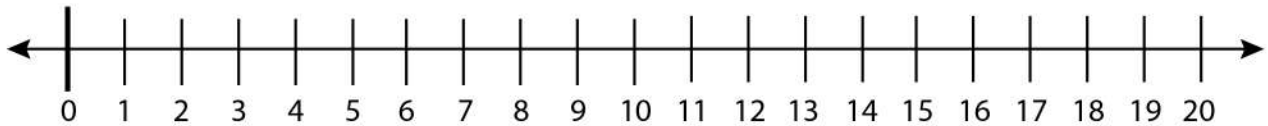
Name: _____

Finding the Next and Previous Number

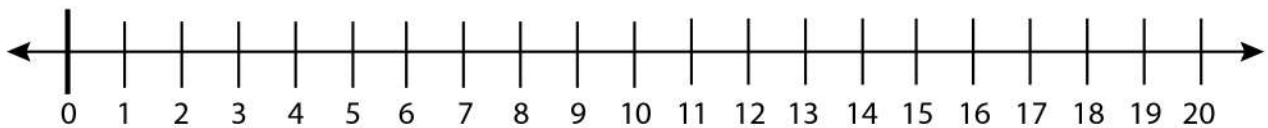
Find the next and previous number of 6 on the number line.



Find the next and previous number of 18 on the number line.



Find the next and previous number of 10 on the number line.



Find the next and previous number of 16 on the number line.

