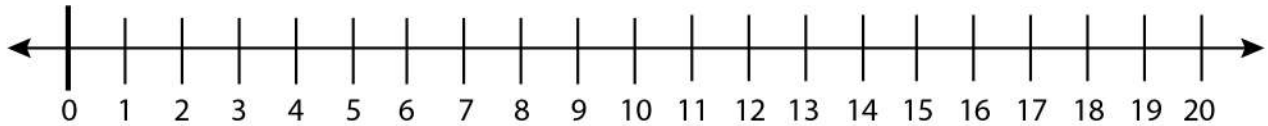


Date: _____

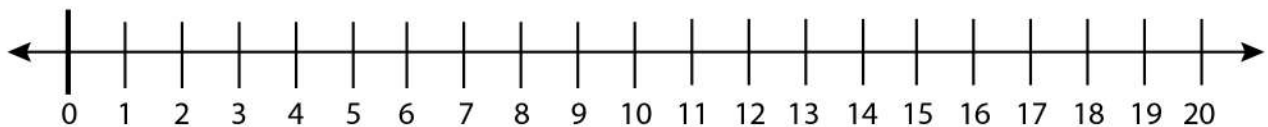
Name: _____

Finding the Next and Previous Number

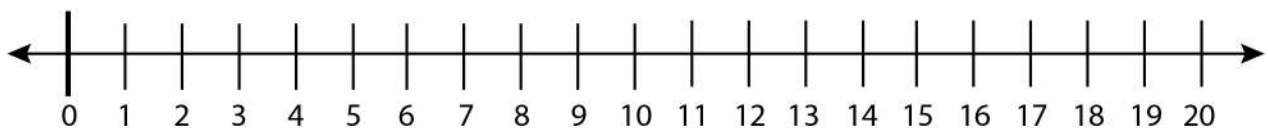
Find the next and previous number of 19 on the number line.



Find the next and previous number of 17 on the number line.



Find the next and previous number of 3 on the number line.



Find the next and previous number of 5 on the number line.

