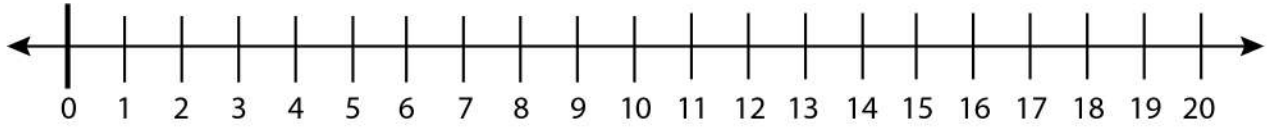


Date:

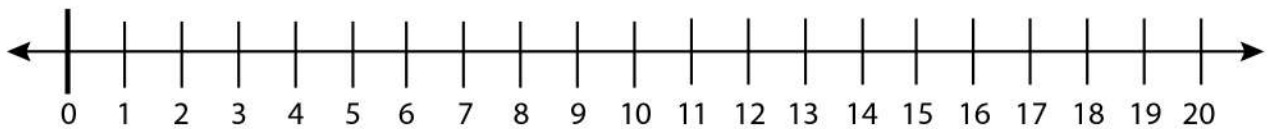
Name:

Finding the Next and Previous Number

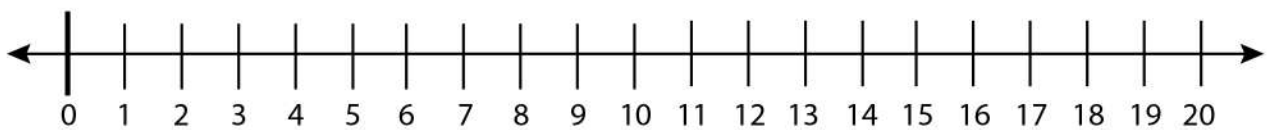
Find the next and previous number of 11 on the number line.



Find the next and previous number of 15 on the number line.



Find the next and previous number of 14 on the number line.



Find the next and previous number of 8 on the number line.

