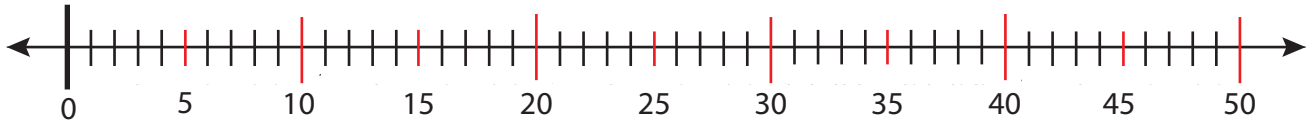


Date:

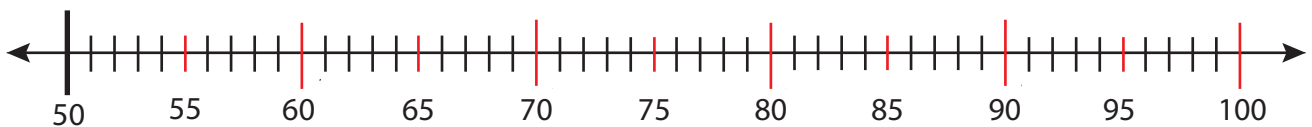
Name:

Guessing Several Numbers on a Number Line

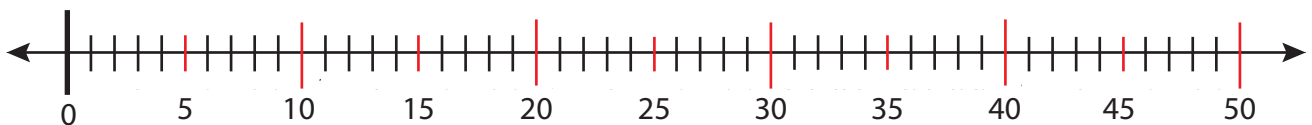
Estimate 19, 21, 29 on the number line.



Estimate 76, 86, 96 on the number line.



Estimate 9, 29, 39 on the number line.



Estimate 69, 72, 87 on the number line.

