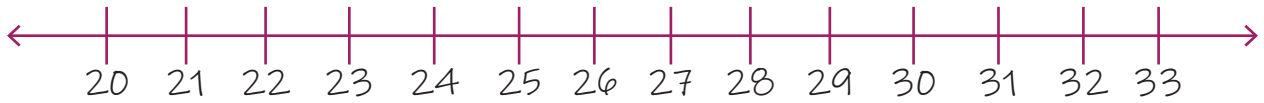


Name: _____

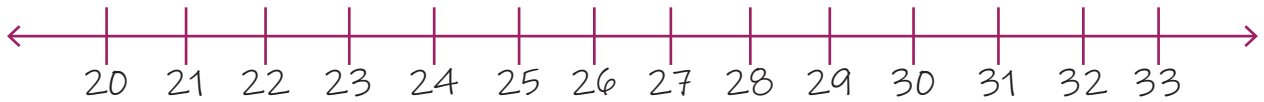
Date: _____

Subtracting Numbers Using Number Lines

1. $32 - 8 = ?$



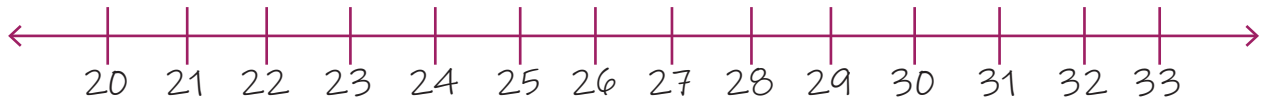
2. $31 - 8 = ?$



3. $29 - 6 = ?$



4. $28 - 3 = ?$



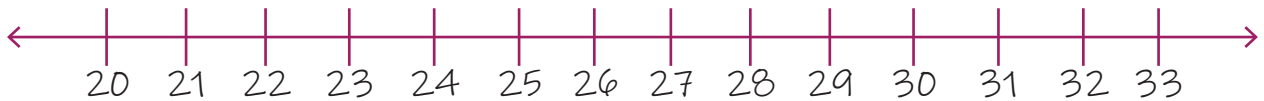
5. $24 - 6 = ?$



6. $25 - 2 = ?$



7. $27 - 2 = ?$



8. $25 - 4 = ?$

