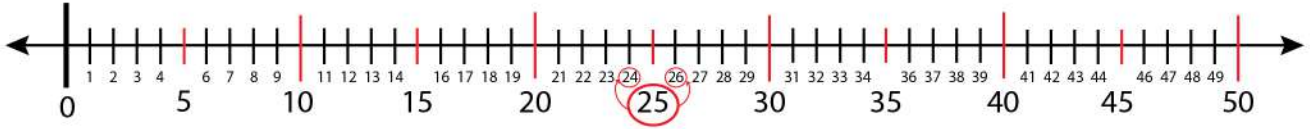


Date:

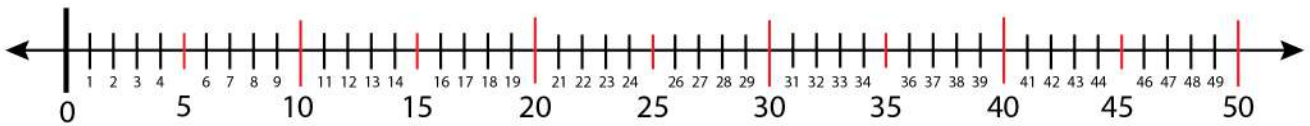
Name:

The Next and Previous Number Finding

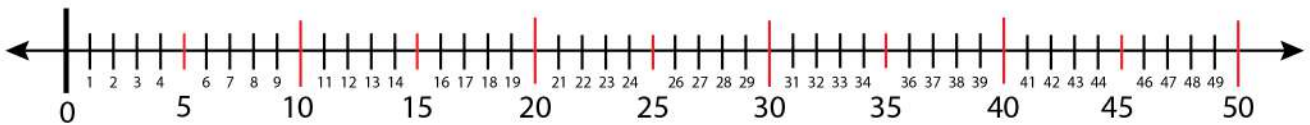
Find the next and previous number of 25 on the number line.



Find the next and previous number of 35 on the number line.



Find the next and previous number of 15 on the number line.



Find the next and previous number of 45 on the number line.

