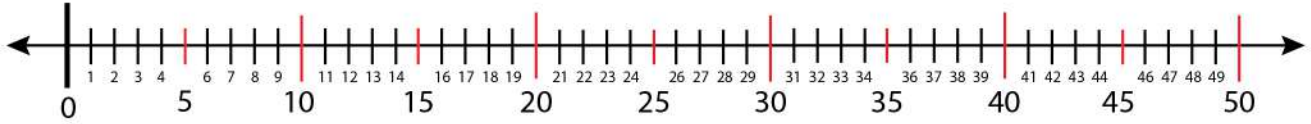


Date:

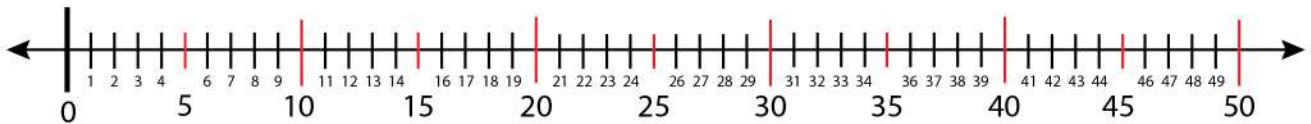
Name:

## The Next and Previous Number Finding

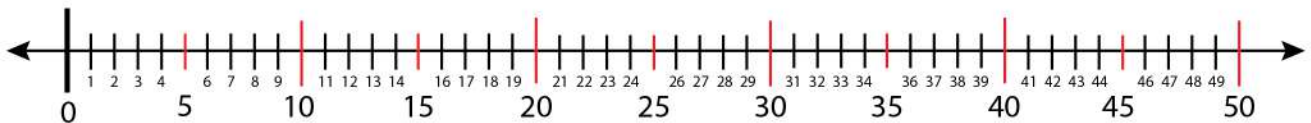
Find the next and previous number of 23 on the number line.



Find the next and previous number of 33 on the number line.



Find the next and previous number of 42 on the number line.



Find the next and previous number of 37 on the number line.

