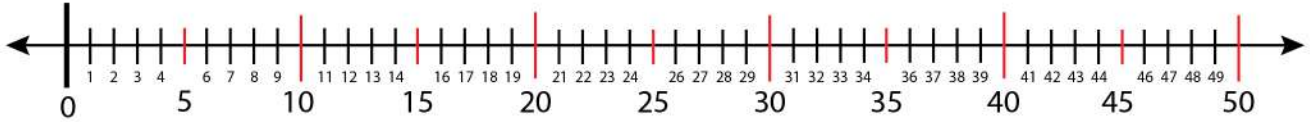


Date:

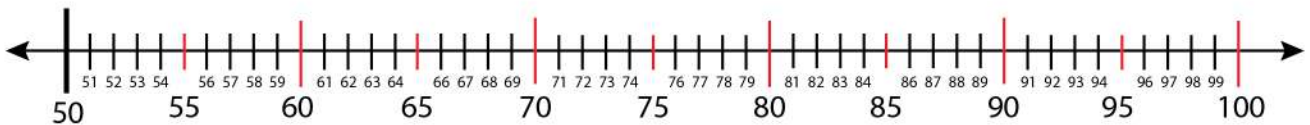
Name:

## The Next and Previous Number Finding

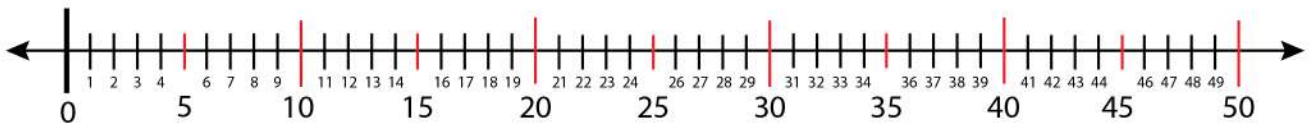
Find the next and previous number of 17 on the number line.



Find the next and previous number of 26 on the number line.



Find the next and previous number of 29 on the number line.



Find the next and previous number of 30 on the number line.

