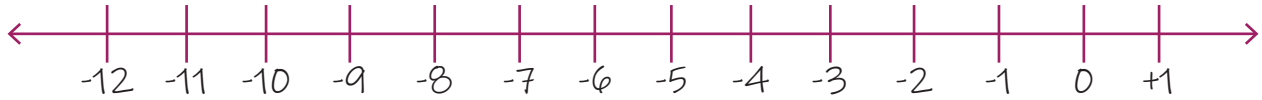


Name: _____

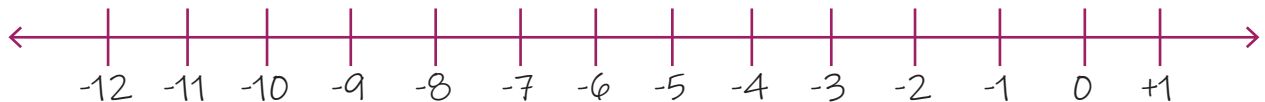
Date: _____

Subtracting a Negative Number from a Negative Number

1. $(-3) - (-1) = ?$



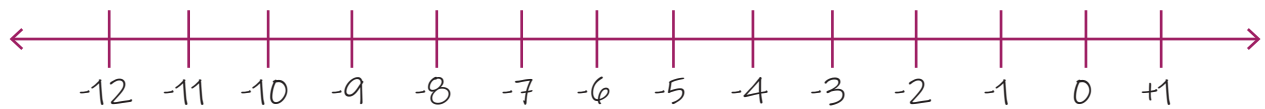
2. $(-3) - (-3) = ?$



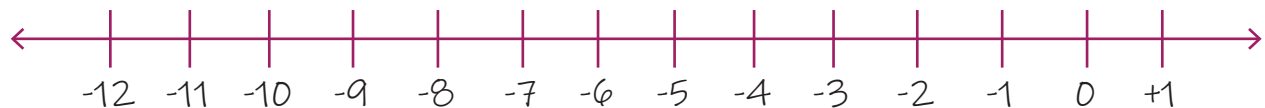
3. $(-2) - (-1) = ?$



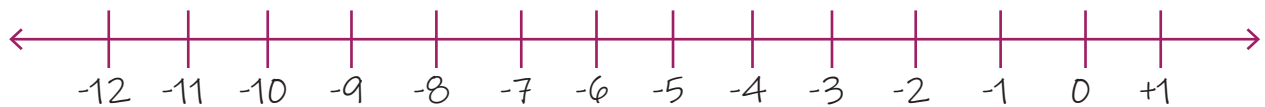
4. $(-3) - (-4) = ?$



5. $(-8) - (-6) = ?$



6. $(-6) - (-3) = ?$



7. $(-5) - (-6) = ?$



8. $(-3) - (-2) = ?$

