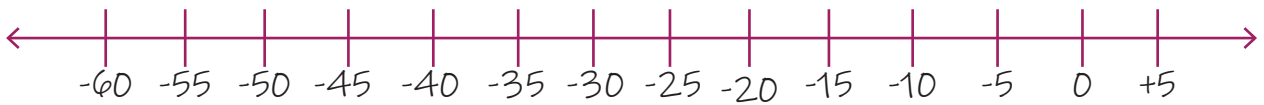


Name:

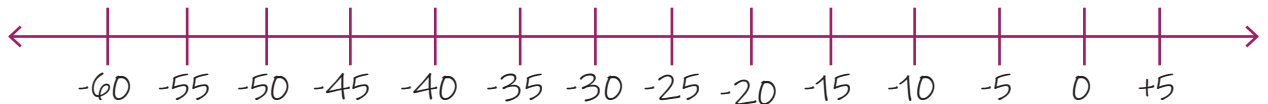
Date:

## Subtracting a Negative Number from a Negative Number

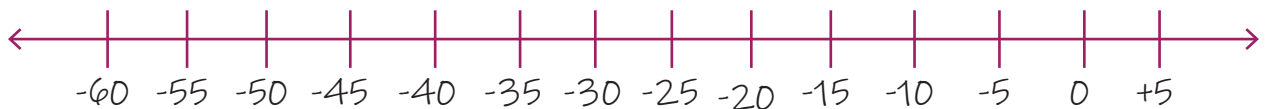
1.  $(-25) + (-10) = ?$



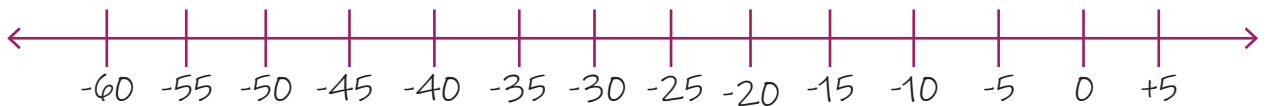
2.  $(-15) + (-5) = ?$



3.  $(-15) + (-25) = ?$



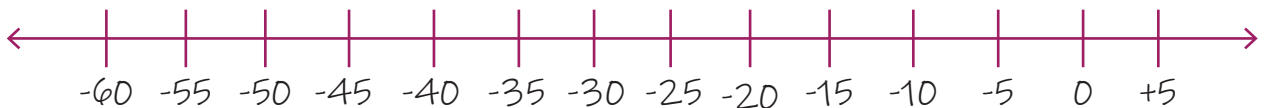
4.  $(-15) + (-25) = ?$



5.  $(-10) + (-15) = ?$



6.  $(-10) + (-10) = ?$



7.  $(-5) + (-20) = ?$



8.  $(-35) + (-10) = ?$

