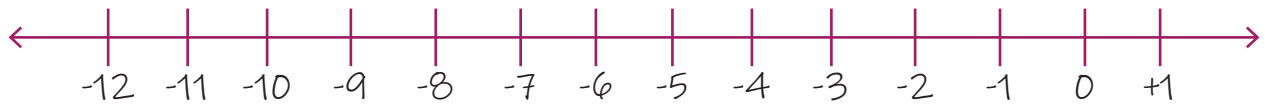


Name: _____

Date: _____

Subtracting a Negative Number from a Negative Number

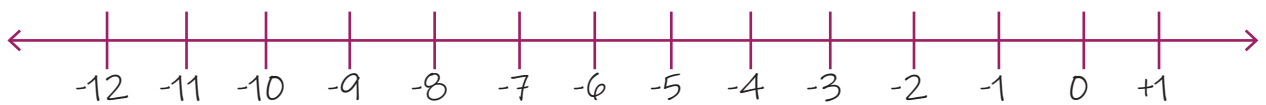
1. $(-10) - (-1) = ?$



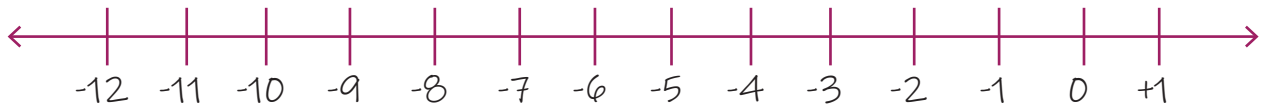
2. $(-12) - (-7) = ?$



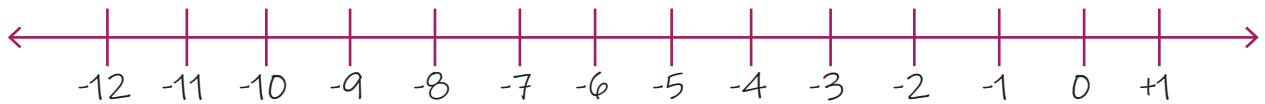
3. $(-9) - (-3) = ?$



4. $(-8) - (-2) = ?$



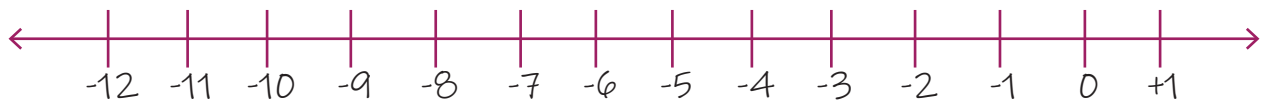
5. $(-4) - (-7) = ?$



6. $(-5) - (-6) = ?$



7. $(-12) - (-8) = ?$



8. $(-5) - (-2) = ?$

