

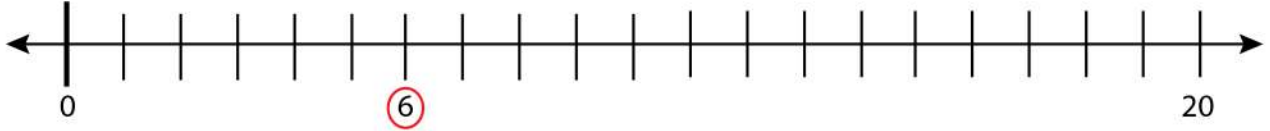
Date: _____

Name: _____

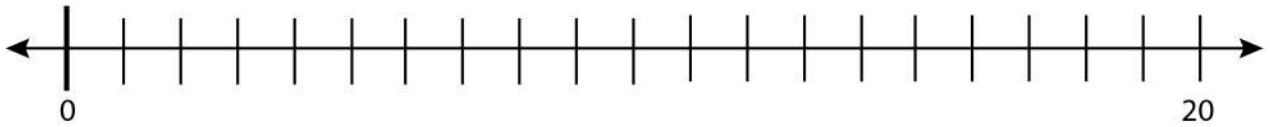
Subtraction of Numbers and Placing the Results

Solve the problem and place the result on the blank number line.

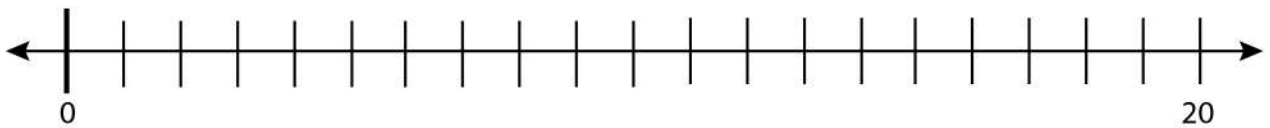
$$8 - 2 = 6$$



$$9 - 3 = ?$$



$$13 - 12 = ?$$



$$15 - 9 = ?$$

