

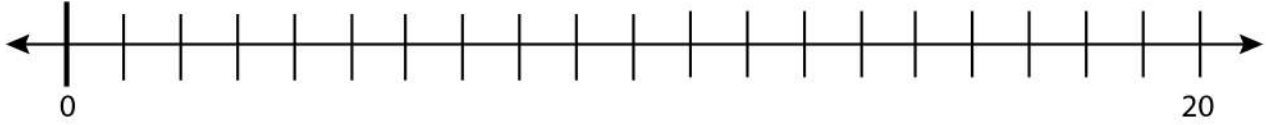
Date: \_\_\_\_\_

Name: \_\_\_\_\_

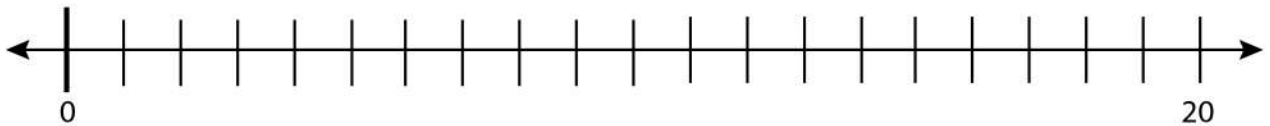
## Subtraction of Numbers and Placing the Results

Solve the problem and place the result on the blank number line.

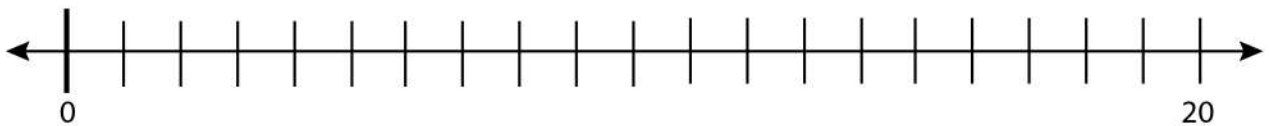
$$13 - 10 = ?$$



$$17 - 8 = ?$$



$$16 - 9 = ?$$



$$13 - 8 = ?$$

