

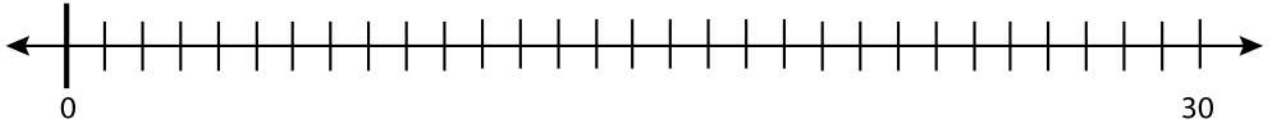
Date:

Name:

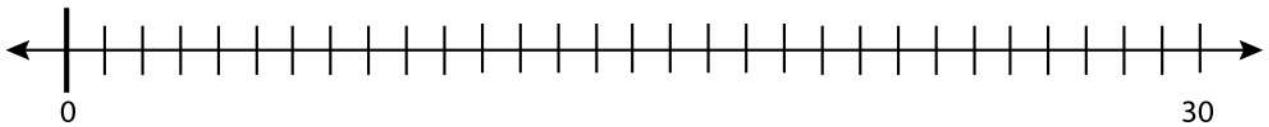
Subtracting Numbers and Placing the Results

Solve the problem and place the result on the blank number line.

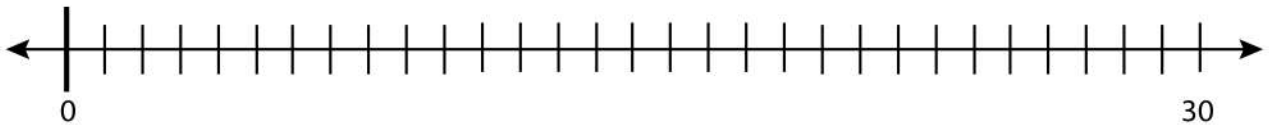
$$24 - 10 = ?$$



$$26 - 11 = ?$$



$$29 - 14 = ?$$



$$26 - 15 = ?$$

