

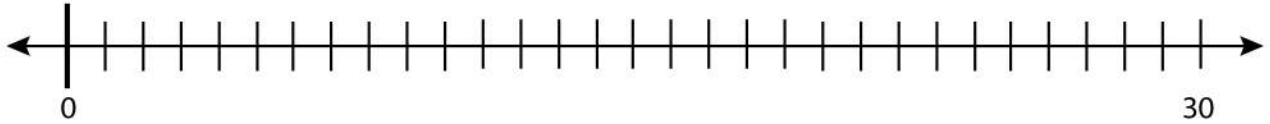
Date:

Name:

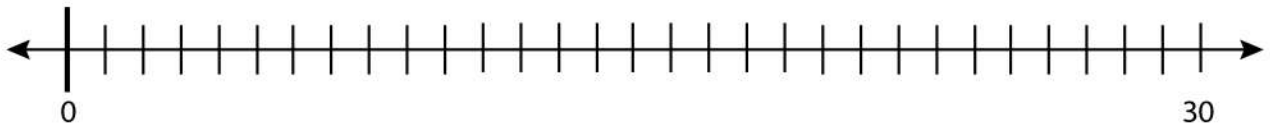
Subtracting Numbers and Placing the Results

Solve the problem and place the result on the blank number line.

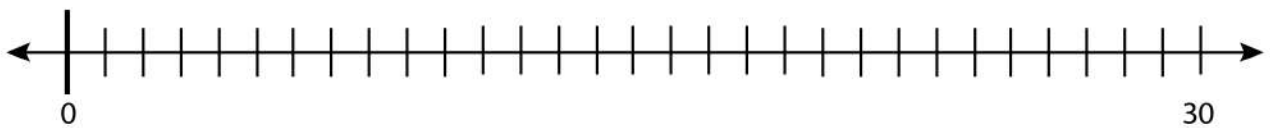
$$19 - 5 = ?$$



$$17 - 8 = ?$$



$$12 - 4 = ?$$



$$18 - 8 = ?$$

