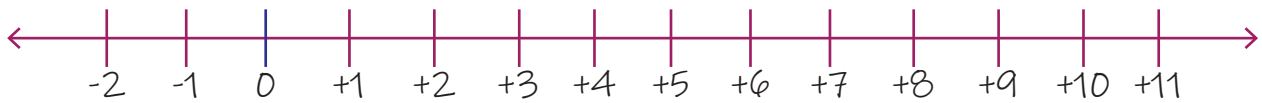


Name: _____

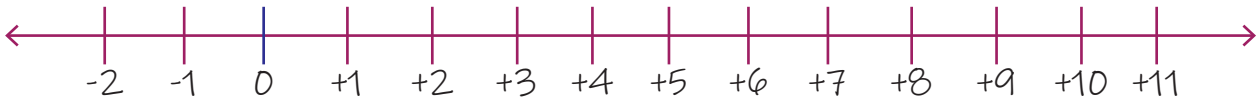
Date: _____

Adding 3 Single Digit Numbers on a Number Line

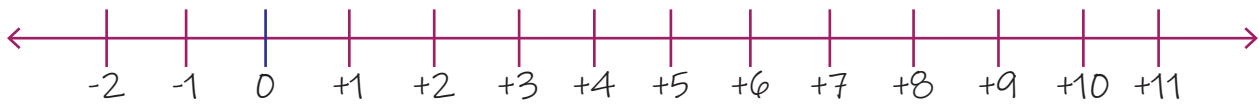
1. $3+7+0=?$



2. $3+5+2=?$



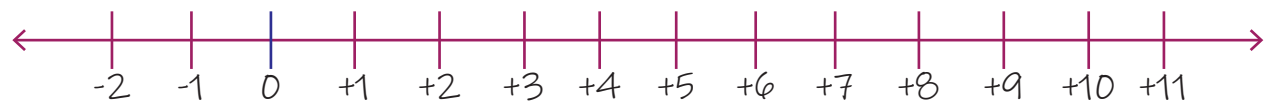
3. $2+2+2=?$



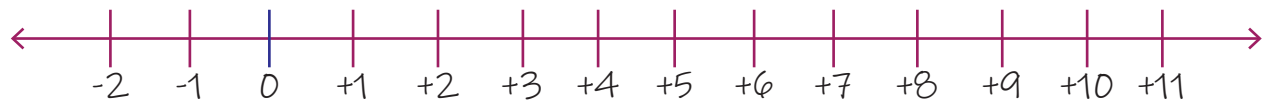
4. $3+4+3=?$



5. $2+3+3=?$



6. $4+2+2=?$



7. $5+3+0=?$



8. $5+2+1=?$

