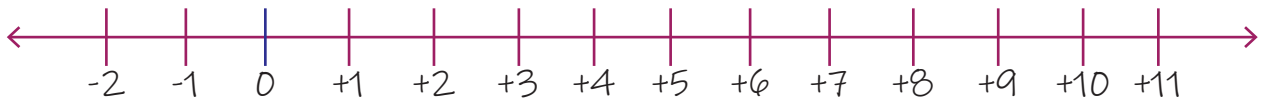


Name: _____

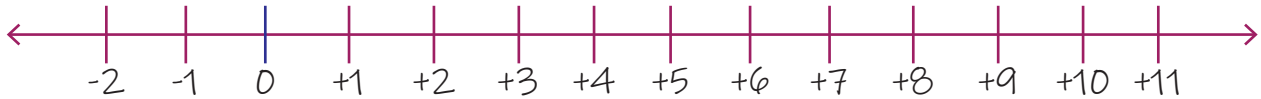
Date: _____

Adding 3 Single Digit Numbers on a Number Line

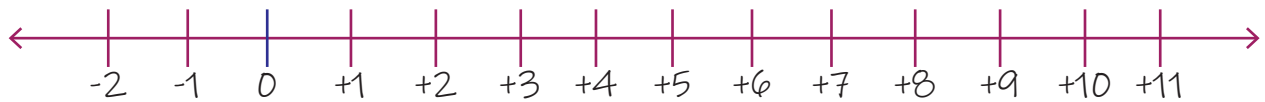
1. $3+1+1=?$



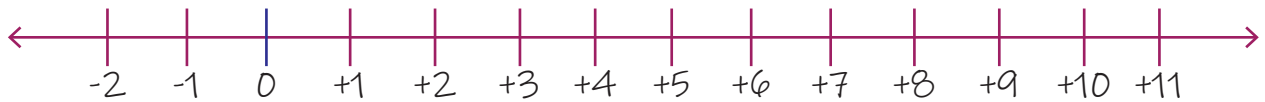
2. $3+2+2=?$



3. $2+3+2=?$



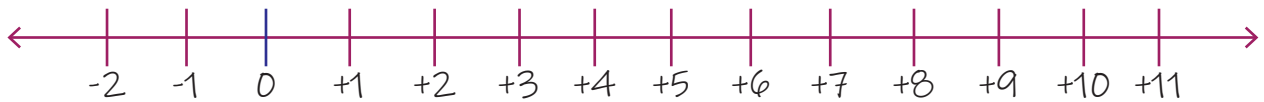
4. $3+0+3=?$



5. $2+5+3=?$



6. $1+3+2=?$



7. $5+3+3=?$



8. $5+1+1=?$

