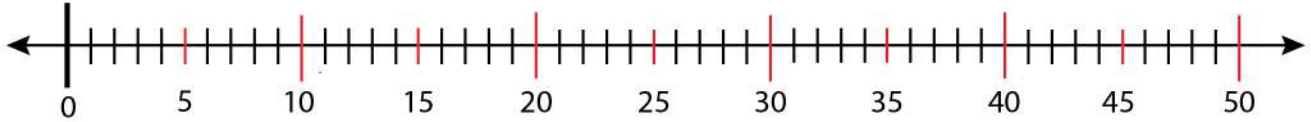


Date: _____

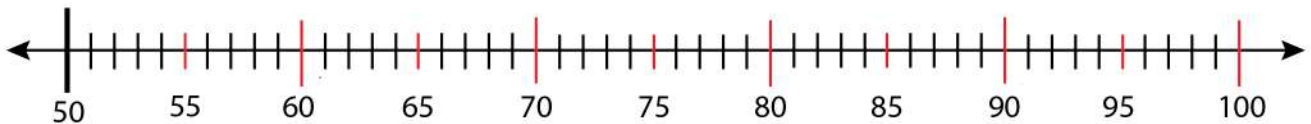
Name: _____

Putting Several Missing Numbers on a Number Line

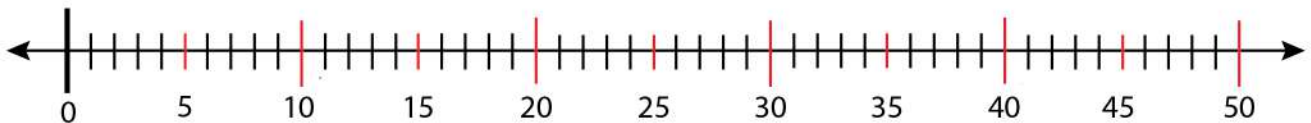
Put 36 to 45 on this blank number line.



Put 76 to 85 on this blank number line.



Put 15 to 35 on this blank number line.



Put 96 to 100 on this blank number line.

