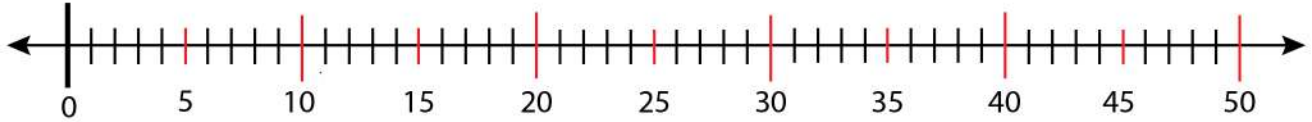


Date: _____

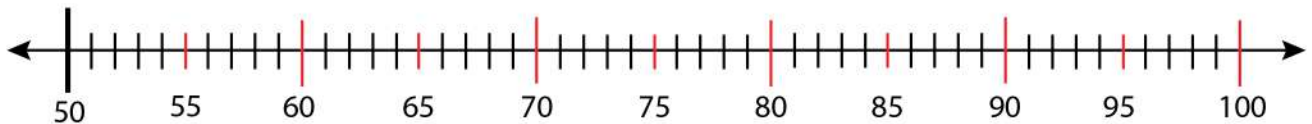
Name: _____

Putting Several Missing Numbers on a Number Line

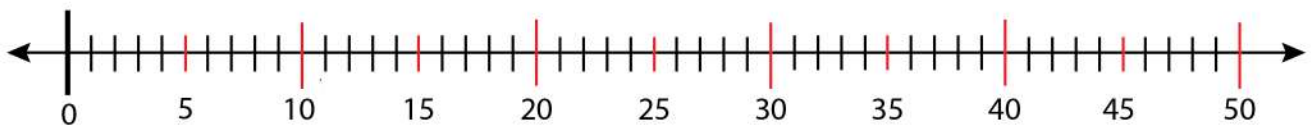
Put 21 to 25 on this blank number line.



Put 71 to 85 on this blank number line.



Put 23 to 27 on this blank number line.



Put 66 to 85 on this blank number line.

