










Name :

Date :

Addition Worksheets with Pictures up to 20



Addition and count the objects.


$$\begin{array}{r} 5 \\ + 6 \\ \hline 11 \end{array}$$

$$\begin{array}{r} 1 \\ + 4 \\ \hline \square \end{array}$$

$$\begin{array}{r} 2 \\ + 5 \\ \hline \square \end{array}$$

$$\begin{array}{r} 7 \\ + 3 \\ \hline \square \end{array}$$

$$\begin{array}{r} 6 \\ + 4 \\ \hline \square \end{array}$$

$$\begin{array}{r} 8 \\ + 11 \\ \hline \square \end{array}$$
