


Date: _____

Name: _____

Finding Total Number of Objects by Skip Count by 2 Worksheet

1. Find the total number of birds by counting by 2s.



2



4

6

8

10

2. Find the total number of pencils by counting by 2s.



3. Find the total number of ducks by counting by 2s.



4. Find the total number of flowers by counting by 2s.