


Name: _____

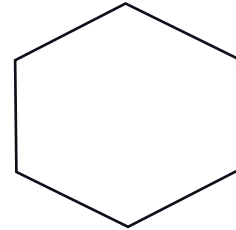
Dividing Shapes into Equal Parts




Draw lines to divide the shapes into equal parts.



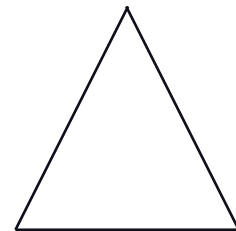
Divide into four equal parts




Divide into two equal parts



Divide into four equal parts



Divide into three equal parts



Divide into six equal parts



Divide into six equal parts

