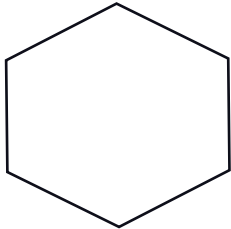


Name: _____


Dividing Shapes into Equal Parts




Draw lines to divide the shapes into equal parts.




Divide into twelve equal parts




Divide into ten equal parts



Divide into three equal parts



Divide into ten equal parts



Divide into two equal parts



Divide into five equal parts

