

Name: _____


Dividing Equal Parts Fractions Worksheets



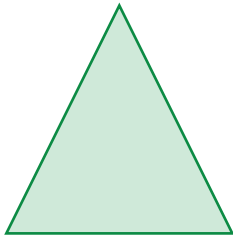
Draw lines to divide the shapes into equal parts.



Divide into two equal parts




Divide into twelve equal parts




Divide into four equal parts



Divide into three equal parts



Divide into six equal parts



Divide into four equal parts

