


Name: _____

Dividing Equal Parts Fractions Worksheets



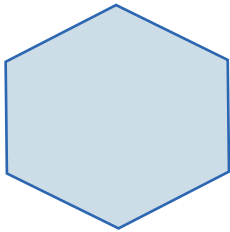
Draw lines to divide the shapes into equal parts.




Divide into three equal parts



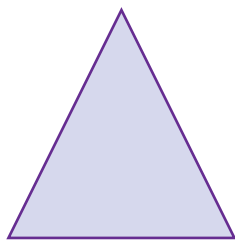
Divide into five equal parts




Divide into two equal parts



Divide into six equal parts



Divide into six equal parts



Divide into two equal parts

