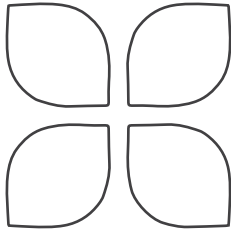


Name: _____


Identifying Equal Parts Fractions Worksheets



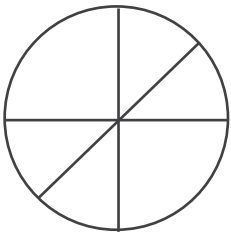
Identify if each given shape is divided into equal or unequal parts and check the correct option.



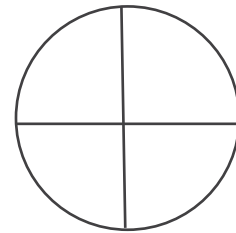
- equal
 Unequal



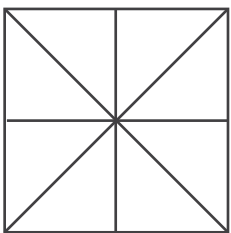
- equal
 Unequal



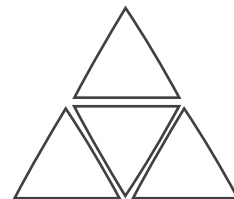
- equal
 Unequal



- equal
 Unequal



- equal
 Unequal



- equal
 Unequal

