




Date:

Name:

Estimating Time and Circling Correct Unit of Time Worksheet

Circle the correct estimated unit of time:

 <p>Minute/ Hour/Day</p>	 <p>Minute/ Hour/Day</p>	 <p>Minute/ Hour/Day</p>
-----------------------------------------------------------------------------------------------------------	-----------------------------------------------------------------------------------------------------------	-------------------------------------------------------------------------------------------------------------

 <p>Minute/ Hour/Day</p>	 <p>Minute/ Hour/Day</p>	 <p>Minute/ Hour/Day</p>
------------------------------------------------------------------------------------------------------------	------------------------------------------------------------------------------------------------------------	--------------------------------------------------------------------------------------------------------------

 <p>Minute/ Hour/Day</p>	 <p>Minute/ Hour/Day</p>	 <p>Minute/ Hour/Day</p>
-------------------------------------------------------------------------------------------------------------	-------------------------------------------------------------------------------------------------------------	---------------------------------------------------------------------------------------------------------------

 <p>Minute/ Hour/Day</p>	 <p>Minute/ Hour/Day</p>	 <p>Minute/ Hour/Day</p>
-------------------------------------------------------------------------------------------------------------	-------------------------------------------------------------------------------------------------------------	---------------------------------------------------------------------------------------------------------------