

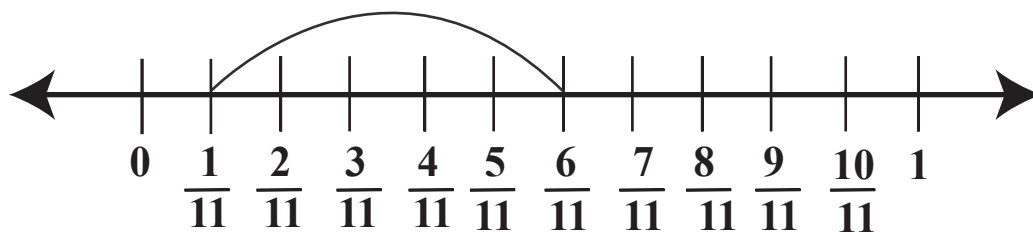
Name :

Date :

Number Line Equations

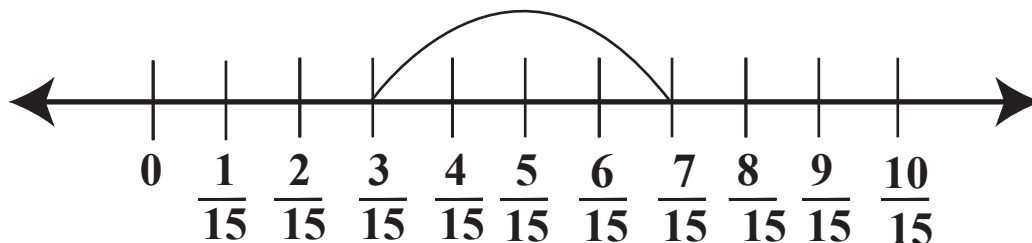
Number line equations for fraction.

1.



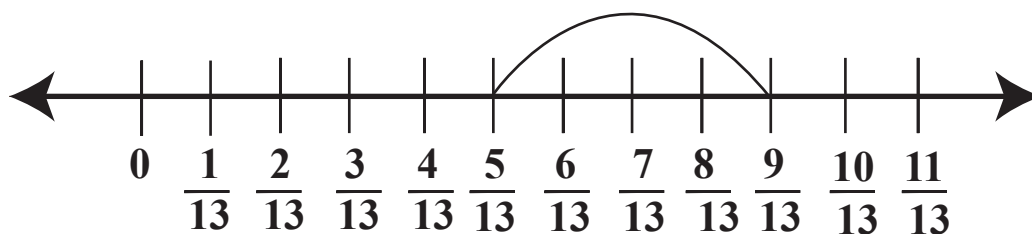
$$\boxed{\frac{1}{11}} + \boxed{\frac{5}{11}} = \boxed{\frac{6}{11}}$$

2.



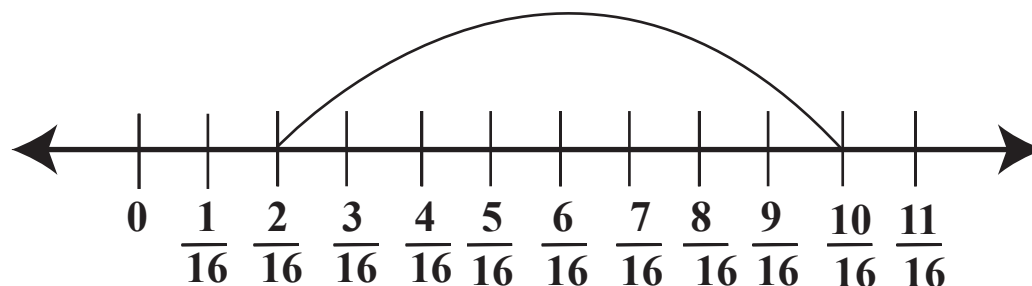
$$\boxed{\phantom{\frac{1}{15}}} + \boxed{\phantom{\frac{1}{15}}} = \boxed{\phantom{\frac{1}{15}}}$$

3.



$$\boxed{\phantom{\frac{1}{13}}} + \boxed{\phantom{\frac{1}{13}}} = \boxed{\phantom{\frac{1}{13}}}$$

4.



$$\boxed{\phantom{\frac{1}{16}}} + \boxed{\phantom{\frac{1}{16}}} = \boxed{\phantom{\frac{1}{16}}}$$

