


Name: _____

Naming in Fractions




Write the fraction that represent each letter of the name.


Alexander




Penelope



Tina



David



Amy

