

Name :

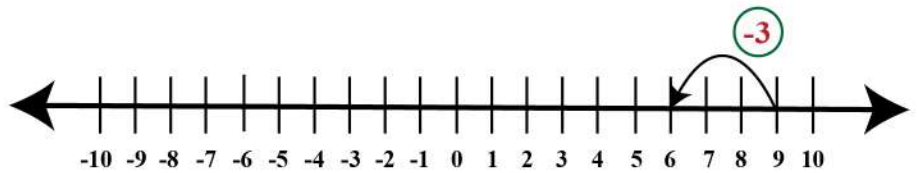
Date :

Number Line Equations

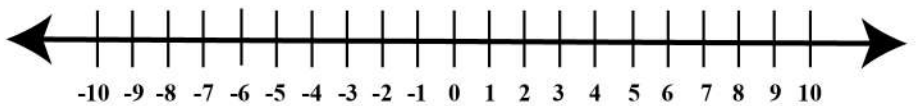


Use the number line to solve the adding integers.

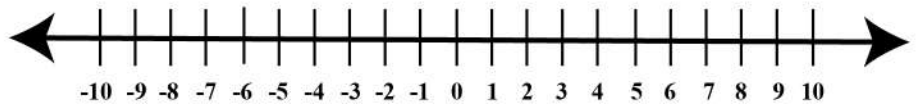
$$\boxed{9} + \boxed{-3} = \underline{6}$$



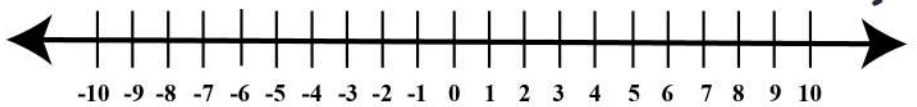
$$\boxed{-2} + \boxed{7} = \underline{\quad}$$



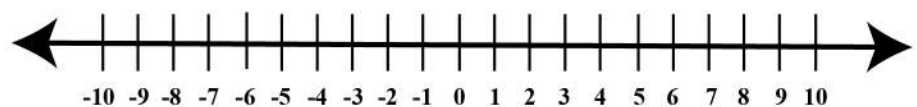
$$\boxed{5} + \boxed{-1} = \underline{\quad}$$



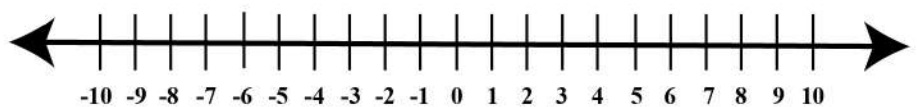
$$\boxed{-9} + \boxed{7} = \underline{\quad}$$



$$\boxed{4} + \boxed{-5} = \underline{\quad}$$



$$\boxed{-7} + \boxed{10} = \underline{\quad}$$



$$\boxed{-8} + \boxed{-2} = \underline{\quad}$$

