

Name :

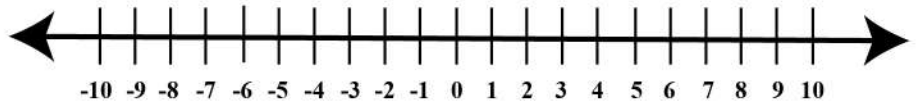
Date :

Number Line Equations

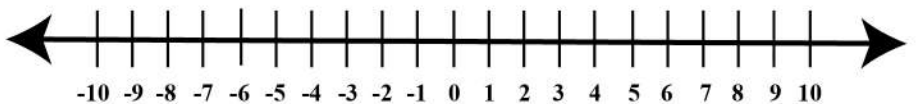


Use the number line to solve the adding integers.

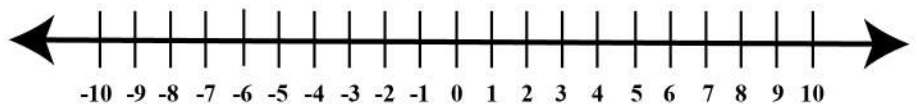
$$\boxed{8} + \boxed{-2} = \underline{\quad}$$



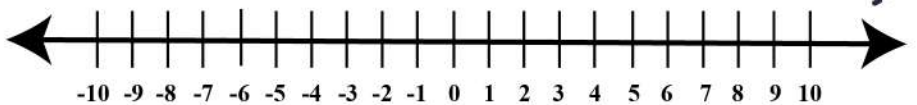
$$\boxed{4} + \boxed{-3} = \underline{\quad}$$



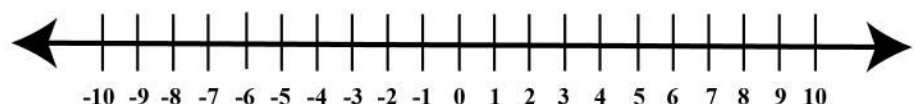
$$\boxed{-9} + \boxed{4} = \underline{\quad}$$



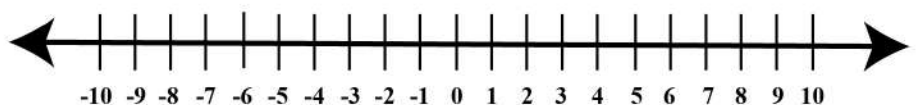
$$\boxed{3} + \boxed{-7} = \underline{\quad}$$



$$\boxed{-5} + \boxed{8} = \underline{\quad}$$



$$\boxed{3} + \boxed{-2} = \underline{\quad}$$



$$\boxed{2} + \boxed{-6} = \underline{\quad}$$

