

Name :

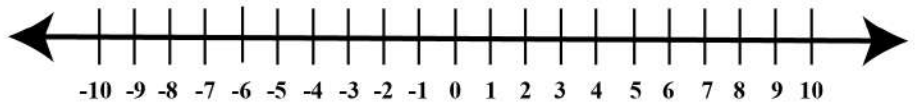
Date :

Number Line Equations

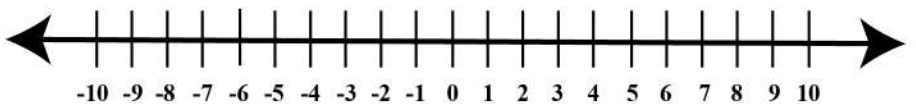


Use the number line to solve the adding integers.

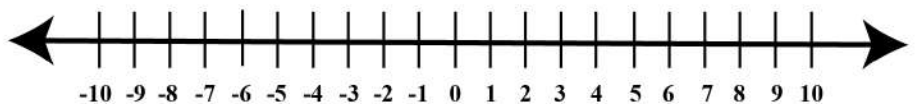
$$\boxed{-3} + \boxed{6} = \underline{\quad}$$



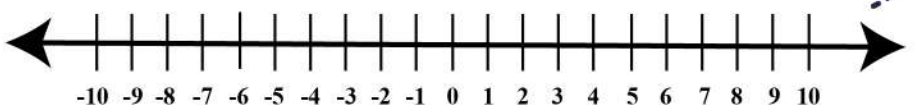
$$\boxed{5} + \boxed{-8} = \underline{\quad}$$



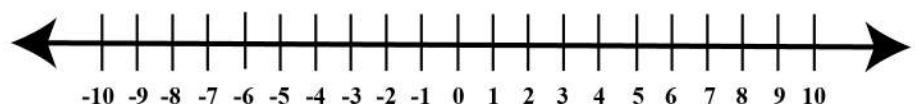
$$\boxed{-7} + \boxed{2} = \underline{\quad}$$



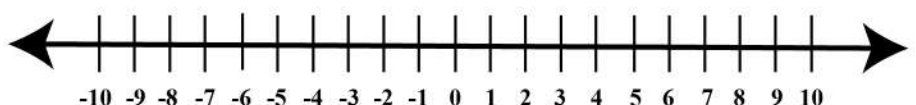
$$\boxed{4} + \boxed{-3} = \underline{\quad}$$



$$\boxed{9} + \boxed{-8} = \underline{\quad}$$



$$\boxed{-10} + \boxed{7} = \underline{\quad}$$



$$\boxed{-1} + \boxed{-3} = \underline{\quad}$$

