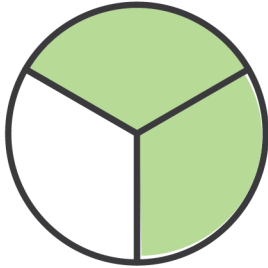



Name: _____

Coloring the Fractions


Shade in the sections of unshaded circles so that they match the fractions.




Color two thirds




Color eight ninths



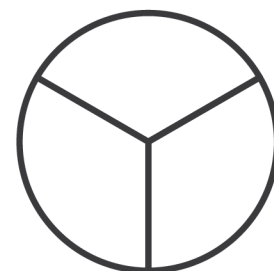
Color four fifths



Color two fifths



Color six ninths



Color one third

