


Name: _____


Coloring the Fractions




Shade in the sections of unshaded circles so that they match the fractions.




Color one fifth




Color five sevenths




Color three ninths



Color three sixths



Color three fourths



Color six ninths

