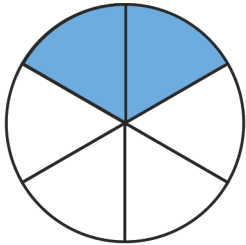


Name: _____

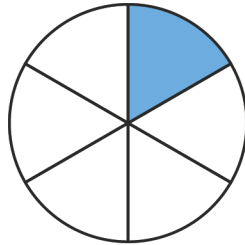
Addition Problems of Fractions



Add the following shaded circles of fractions with same denominator

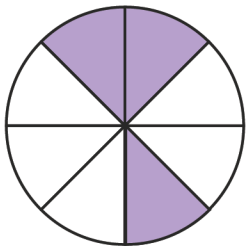


+

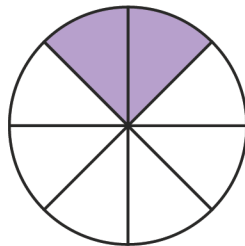


=

$$\frac{\boxed{3}}{6}$$

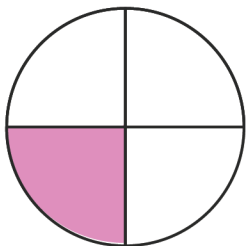


+

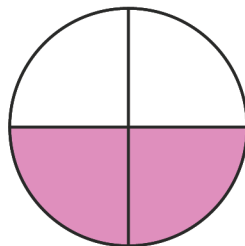


=

$$\frac{\boxed{}}{8}$$

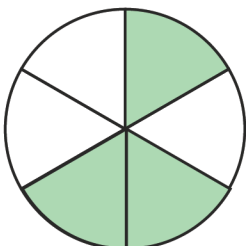


+

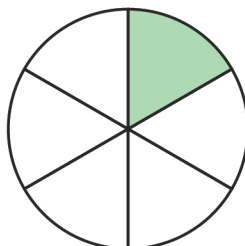


=

$$\frac{\boxed{}}{4}$$

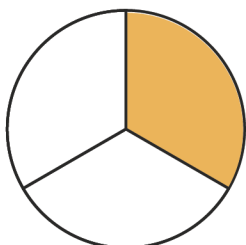


+

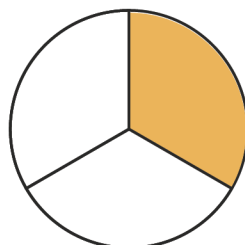


=

$$\frac{\boxed{}}{6}$$



+



=

$$\frac{\boxed{}}{3}$$

