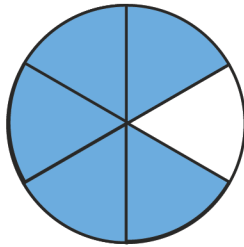


Name: \_\_\_\_\_

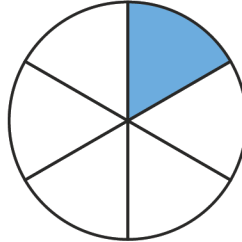
# Addition Problems of Fractions



Add the following shaded circles of fractions with same denominator

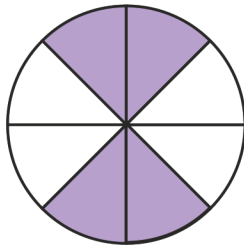


+

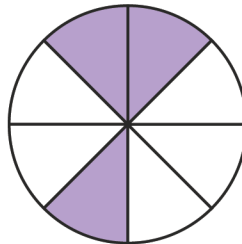


=

$$\frac{\square}{6}$$

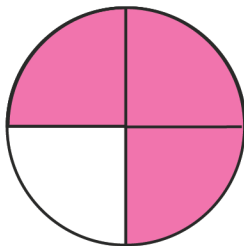


+

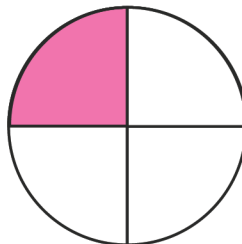


=

$$\frac{\square}{8}$$

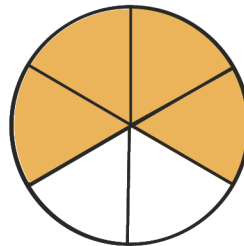


+

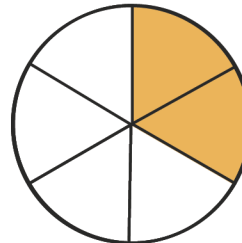


=

$$\frac{\square}{4}$$

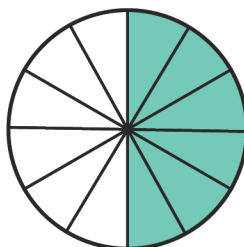


+

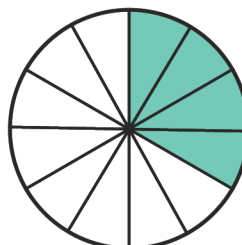


=

$$\frac{\square}{6}$$



+



=

$$\frac{\square}{12}$$

