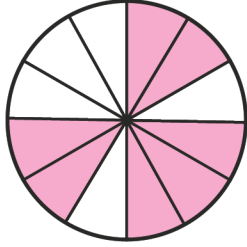


Name: _____

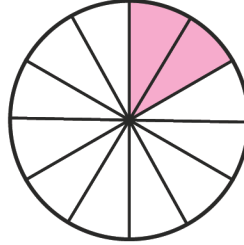
Subtraction Problems of Fractions



Add the following shaded circles of fractions with same denominator

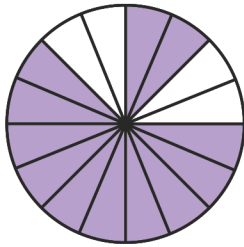


-

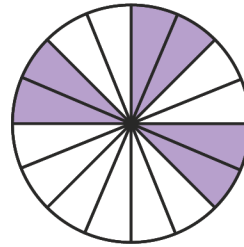


=

$$\frac{\square}{12}$$

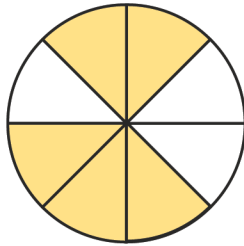


-

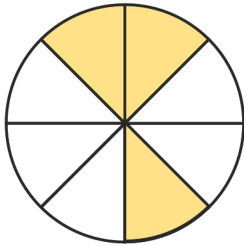


=

$$\frac{\square}{16}$$

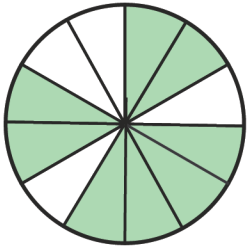


-

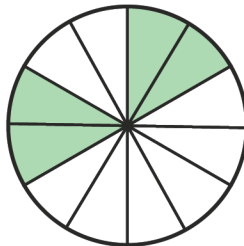


=

$$\frac{\square}{8}$$

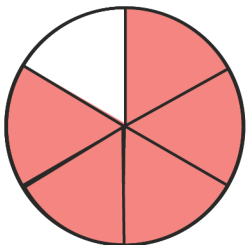


-

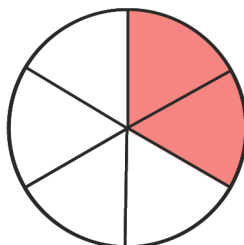


=

$$\frac{\square}{12}$$



-



=

$$\frac{\square}{6}$$

