



Worksheet on Finding Subtraction Result by Crossing out Items



$$7 - 4 = \underline{\quad}$$

Total: _____



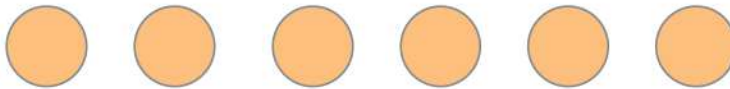
$$5 - 3 = \underline{\quad}$$

Total: _____




$$9 - 5 = \underline{\quad}$$

Total: _____



$$6 - 3 = \underline{\quad}$$

Total: _____




$$8 - 4 = \underline{\quad}$$

Total: _____



$$9 - 2 = \underline{\quad}$$

Total: _____



$$4 - 3 = \underline{\quad}$$

Total: _____