



# Worksheet on Doing Vertical Subtraction with Pictures




$$\begin{array}{r} 8 \\ - 7 \\ \hline \end{array}$$




$$\begin{array}{r} 11 \\ - 7 \\ \hline \end{array}$$




$$\begin{array}{r} 5 \\ - 4 \\ \hline \end{array}$$




$$\begin{array}{r} 9 \\ - 7 \\ \hline \end{array}$$




$$\begin{array}{r} 9 \\ - 5 \\ \hline \end{array}$$



$$\begin{array}{r} 7 \\ - 7 \\ \hline \end{array}$$



$$\begin{array}{r} 5 \\ - 1 \\ \hline \end{array}$$



$$\begin{array}{r} 4 \\ - 2 \\ \hline \end{array}$$

