




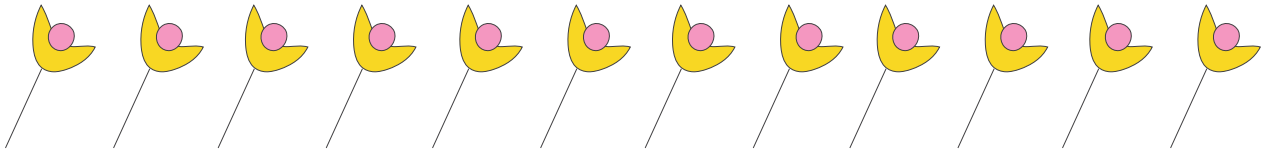
Worksheet on Filling Missing Numbers in Subtraction with Pictures up to 20



$$\square - 7 = \square$$




$$12 - \square = \square$$



$$19 - \square = \square$$



$$\square - 9 = \square$$



$$16 - \square = \square$$